

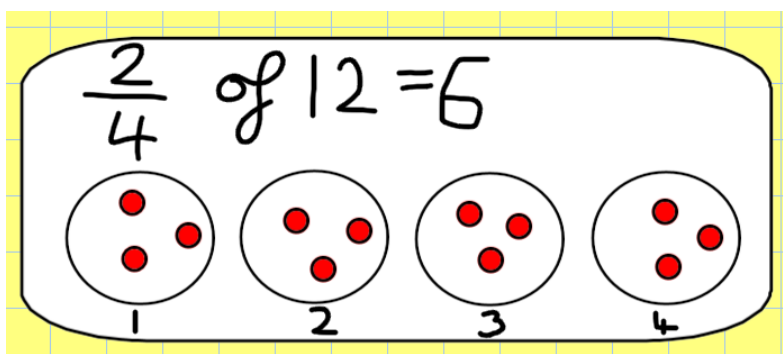
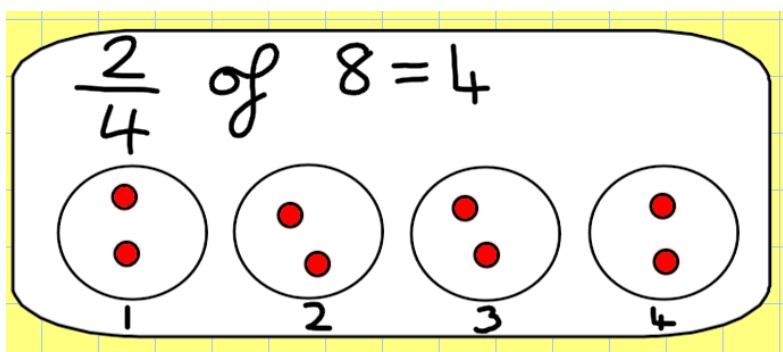
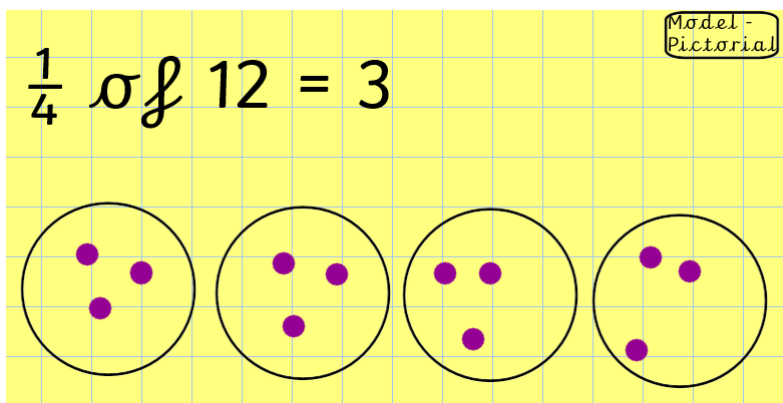
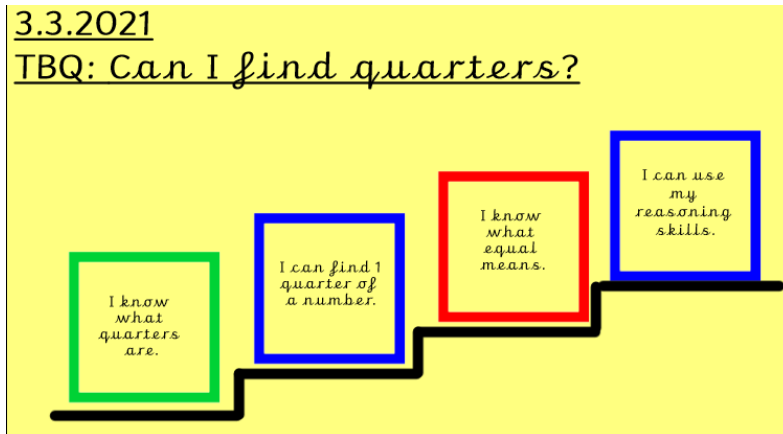
# Maths - Wednesday 3<sup>rd</sup> March

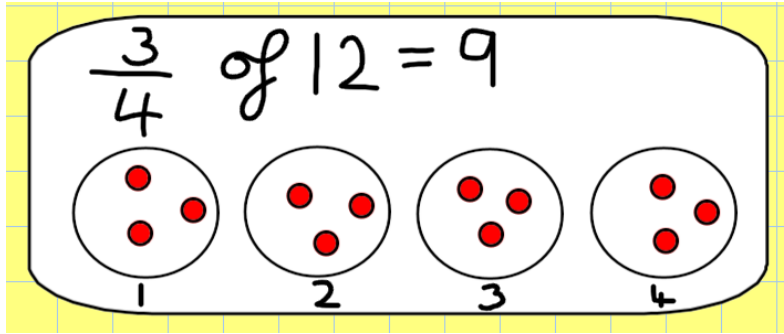
Thursday, February 25, 2021 12:29 PM

- Starter - Can you count in 10s backwards from 100?

3.3.2021

TBQ: Can I find quarters?





Mild - The numbers are the same as yesterday but this time I would like you to draw the 4 circles and split your number into 4.

$\frac{1}{4}$  of 4

$\frac{1}{4}$  of 8

$\frac{1}{4}$  of 12

$\frac{1}{4}$  of 16

Hot - Draw your 4 circles and your dots to work these out.

$\frac{1}{4}$  of 12

$\frac{1}{4}$  of 16

$\frac{2}{4}$  of 8

$\frac{2}{4}$  of 4

$\frac{3}{4}$  of 8

$\frac{3}{4}$  of 4

Scorching - Rex thinks that  $\frac{3}{4}$  of 12 is 3. Is he right? How do you know?